
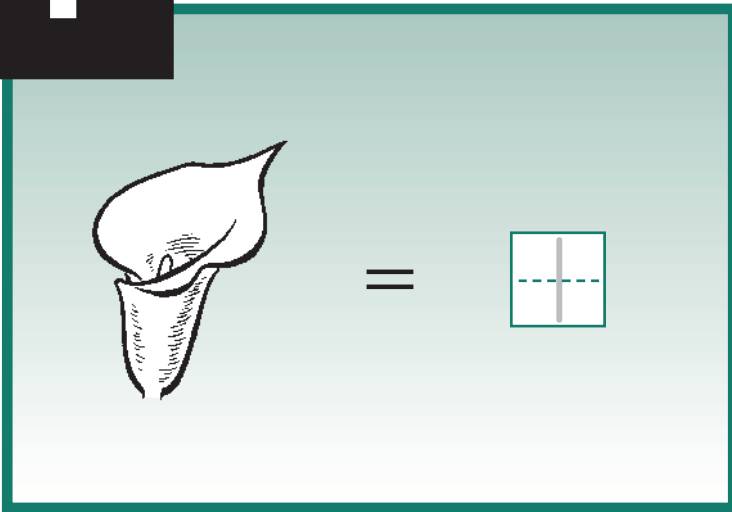
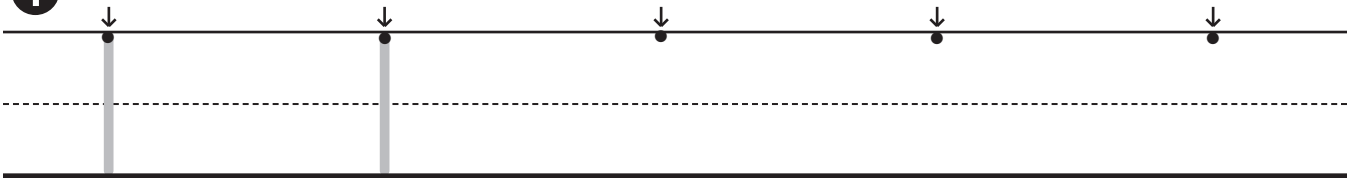


1

One



1



2


**+ New
= Fact**

$1 + 1 =$

$\boxed{\begin{array}{|c|} \hline \text{---} \\ \hline \text{---} \\ \hline \end{array}} + \boxed{\begin{array}{|c|} \hline \text{---} \\ \hline \text{---} \\ \hline \end{array}} = \boxed{2}$

$\boxed{\text{---}} + \boxed{\text{---}} = \boxed{2}$

3



Lesson 1

④ 1 + 1 =

+ =

⑤ How many ducks?

Make a mark for each duck.

Color the duck.



⑥





Just for Fun



About Me


I have _____ nose.

I have _____ head.

I have _____ mouth.


I have _____ God.

Draw a picture of yourself.



2

Two



=


2



=

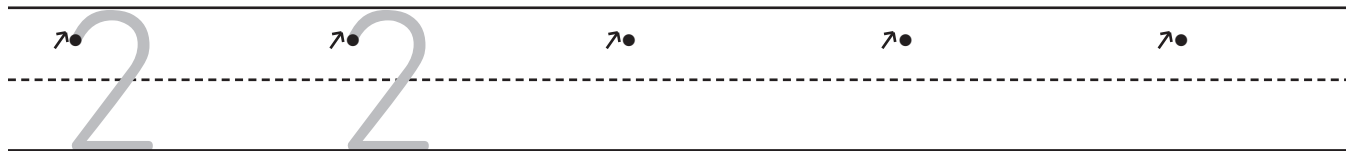
2

Around and back on a railroad track—



Two, two, two.

1



2

**+ New
= Fact**

1 + 2 =



+ =

1		
+2	+	
<hr/>		
		3

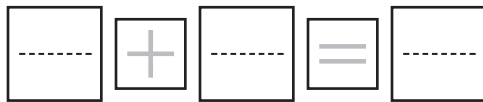
3



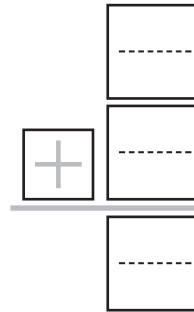
4 Trace a mark for each picture. How many marks?



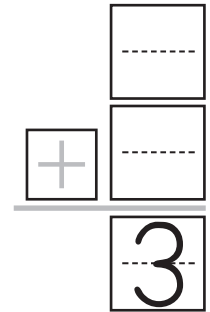
5 1 + 1 =



+ 1



+ 2



6 Color the correct number of balls. Start at the bottom.



3

2

5


1


4




3

Three

 =

 =



This is how to make a three.

1

2

**+ New
= Fact**

$2 + 1 =$

+ =

$\begin{array}{r} 2 \\ +1 \\ \hline \end{array}$


$\begin{array}{r} \boxed{} \\ \boxed{} \\ \hline \boxed{} \\ \boxed{} \end{array}$

3 Write the number that is one more.

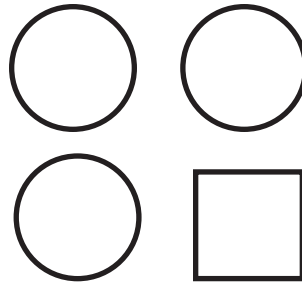
2

1

4



5 How many circles?



I Can Do This

6



7 Write the sums.

$$\begin{array}{r} 2 \\ + 1 \\ \hline \\ \hline \end{array}$$

$$\begin{array}{r} 1 \\ + 2 \\ \hline \\ \hline \end{array}$$



$$\begin{array}{r} 1 \\ + 1 \\ \hline \\ \hline \end{array}$$



$$\begin{array}{r} 2 \\ + 1 \\ \hline \\ \hline \end{array}$$

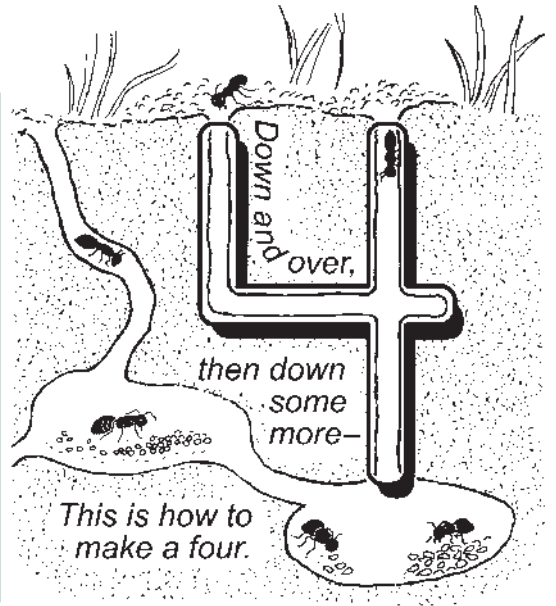


4

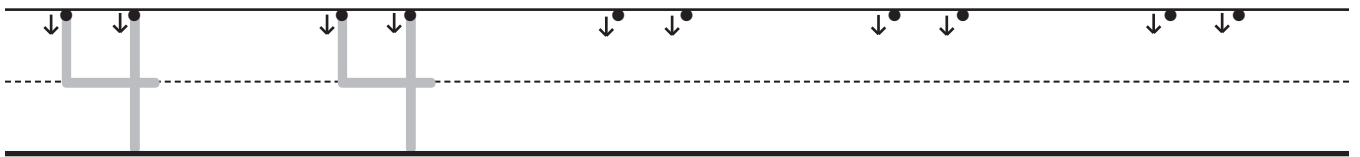
Four

 = 

 = 



1



2

**+ New
= Fact**

2
+2


	+	

3

Story Problem

	+		=	
--	---	--	---	--

ducks



4


Write the number that is one more.

3 _____

2 _____

1 _____

5



I Can Do This

6 Write the sums.

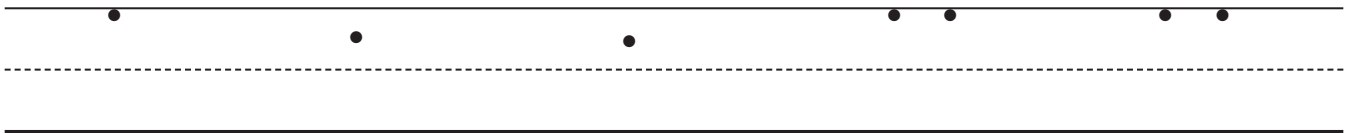
$$\begin{array}{r} 2 \\ + 1 \\ \hline \\ \hline \\ \hline \end{array}$$

$$\begin{array}{r} 1 \\ + 1 \\ \hline \\ \hline \\ \hline \end{array}$$


$$\begin{array}{r} 1 \\ + 2 \\ \hline \\ \hline \\ \hline \end{array}$$

$$\begin{array}{r} 2 \\ + 2 \\ \hline \\ \hline \\ \hline \end{array}$$

7



8 Trace 2 circles. Draw 2 circles. Color the circles.



Lesson 4

9 Write the sums.

$$2 + 2 = \begin{array}{c} \underline{\quad} \\ \text{-----} \\ \underline{\quad} \end{array}$$

$$2 + 1 = \begin{array}{c} \underline{\quad} \\ \text{-----} \\ \underline{\quad} \end{array}$$

$$1 + 2 = \begin{array}{c} \underline{\quad} \\ \text{-----} \\ \underline{\quad} \end{array}$$

$$1 + 1 = \begin{array}{c} \underline{\quad} \\ \text{-----} \\ \underline{\quad} \end{array}$$



Just for Fun

About Me



I have $\begin{array}{c} \underline{\quad} \\ \text{-----} \\ \underline{\quad} \end{array}$ eyes.

I have $\begin{array}{c} \underline{\quad} \\ \text{-----} \\ \underline{\quad} \end{array}$ ears.

I have $\begin{array}{c} \underline{\quad} \\ \text{-----} \\ \underline{\quad} \end{array}$ arms.

I have $\begin{array}{c} \underline{\quad} \\ \text{-----} \\ \underline{\quad} \end{array}$ hands.

I have $\begin{array}{c} \underline{\quad} \\ \text{-----} \\ \underline{\quad} \end{array}$ legs.

I have $\begin{array}{c} \underline{\quad} \\ \text{-----} \\ \underline{\quad} \end{array}$ feet.