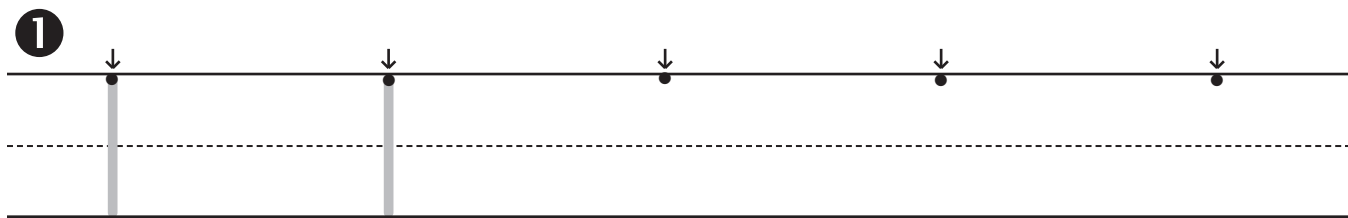

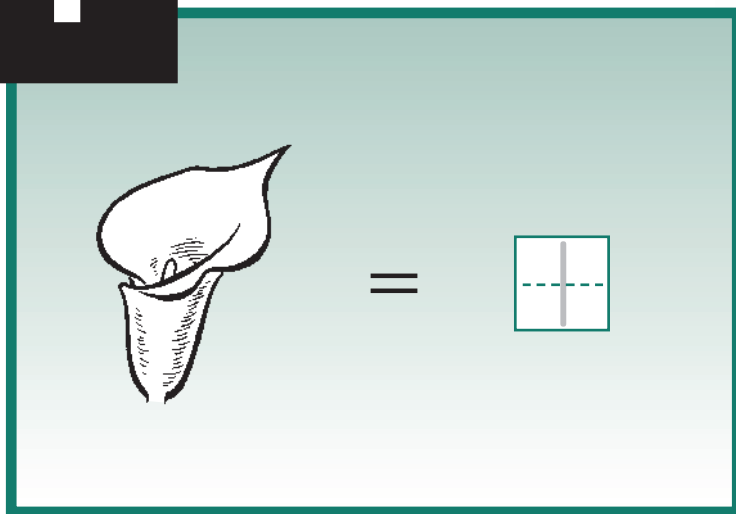


# 1

# One



2

**+ New  
= Facts**

1 + 1 =

$$\boxed{\begin{array}{|c|} \hline \text{---} \\ \hline \end{array}} + \boxed{\begin{array}{|c|} \hline \text{---} \\ \hline \end{array}} = \boxed{2}$$

$$\boxed{\text{---}} + \boxed{\text{---}} = \boxed{2}$$

3



**Lesson 1**

**4** 1 + 1 =

+  =

**5** How many ducks?

**Make a mark for each duck.**

**Colour the duck.**



**6**





**Just for Fun**



About Me

I have \_\_\_\_\_ nose .

I have \_\_\_\_\_ head .

I have \_\_\_\_\_ mouth .

I have \_\_\_\_\_ God .

**Draw a picture of yourself.**

A large, empty rectangular box with a thin black border, intended for a child to draw a picture of themselves.

# 2

# Two



=


2



=

2

Around and back on a railroad track—



Two, two, two.

1

7•

7•

7•

7•

7•

2

**+ New  
= Facts**

1 + 2 =

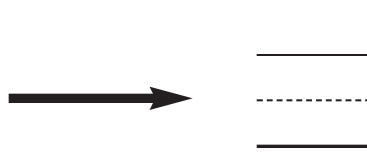
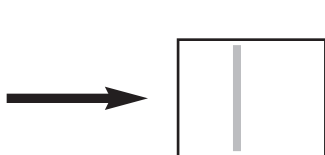

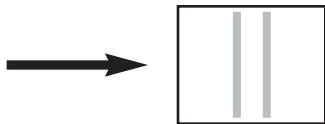
+  =

$$\begin{array}{r} 1 \\ +2 \\ \hline \end{array}$$

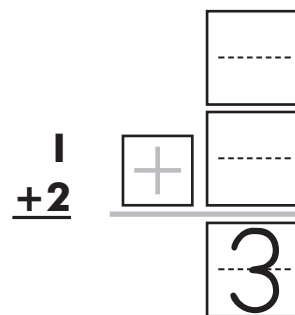
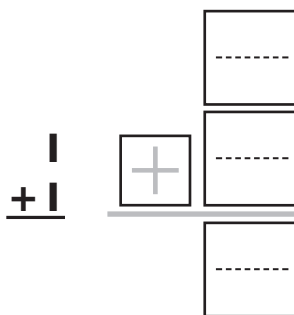
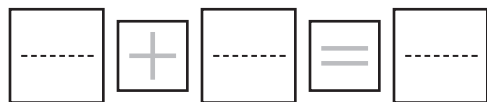
3



④ Trace a mark for each picture. How many marks?



⑤  $1 + 1 =$



⑥ Colour the correct number of balls. Start at the bottom.



3

2

5

1


4



5

# 3

# Three




=

3



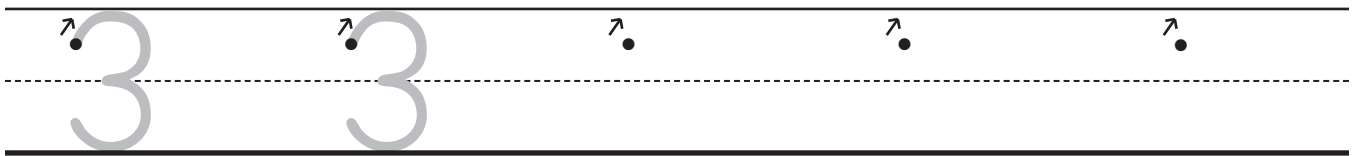
=

3



This is how to make a three.

1



2

**+ New  
= Facts**

2 + 1 =

	+		=	
--	---	--	---	--

2  
+ 1

+	


3

Write the number that is one more.

2           
            
          

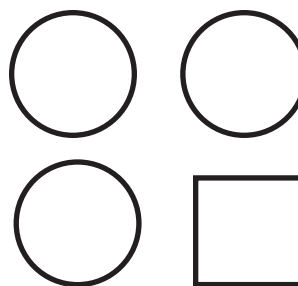
1

4



5 How many circles?

\_\_\_\_\_  
\_\_\_\_\_  
\_\_\_\_\_



*I Can Do This*

6

1 2 3 2 3

\_\_\_\_\_

\_\_\_\_\_

\_\_\_\_\_

7 Write the sums.

$$\begin{array}{r} 2 \\ + 1 \\ \hline \\ \hline \end{array}$$

$$\begin{array}{r} 1 \\ + 2 \\ \hline \\ \hline \end{array}$$

$$\begin{array}{r} 1 \\ + 1 \\ \hline \\ \hline \end{array}$$

$$\begin{array}{r} 2 \\ + 1 \\ \hline \\ \hline \end{array}$$



# 4

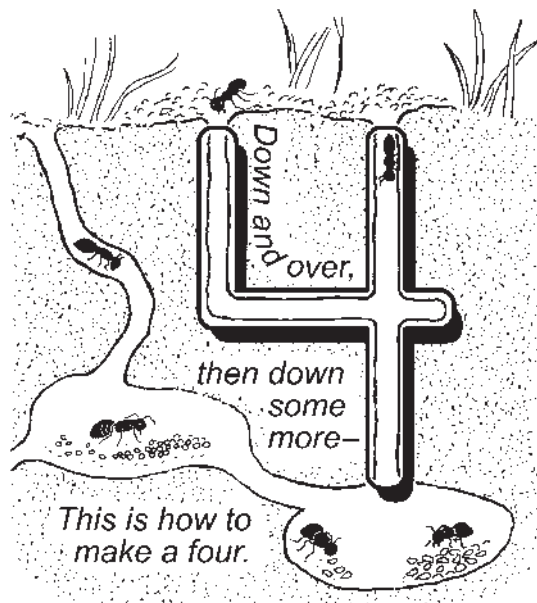
# Four



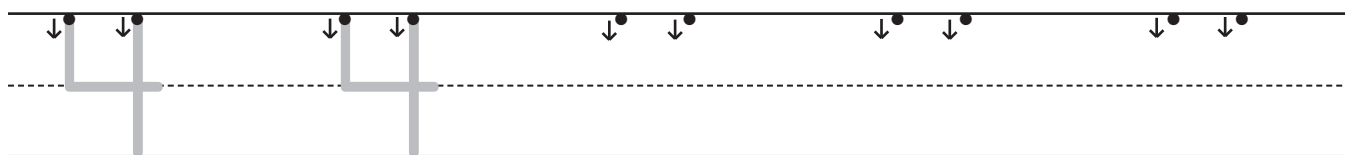
=



=



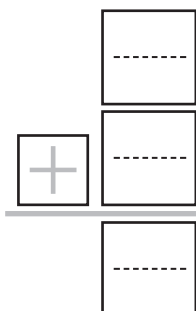
1



2

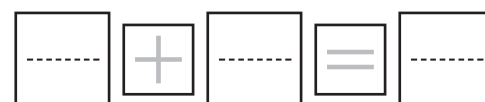
**+ New  
= Facts**

2  
+2




3

**Story  
Problem**



ducks



4

Write the number that is one more.


3   
-----

2   
-----

1   
-----



5



***I Can Do This***

6 Write the sums.

$$\begin{array}{r} 2 \\ + 1 \\ \hline \\ \hline \end{array}$$

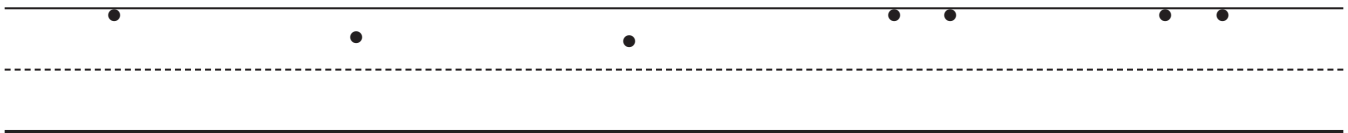
$$\begin{array}{r} 1 \\ + 1 \\ \hline \\ \hline \end{array}$$

$$\begin{array}{r} 1 \\ + 2 \\ \hline \\ \hline \end{array}$$

$$\begin{array}{r} 2 \\ + 2 \\ \hline \\ \hline \end{array}$$

7

1 2 3 4 4



8 Trace 2 circles. Draw 2 circles. Colour the circles.



## Lesson 4

⑨ Write the sums.

$$2 + 2 = \begin{array}{c} \text{---} \\ \text{---} \\ \text{---} \end{array}$$

$$2 + 1 = \begin{array}{c} \text{---} \\ \text{---} \\ \text{---} \end{array}$$


$$1 + 2 = \begin{array}{c} \text{---} \\ \text{---} \\ \text{---} \end{array}$$

$$1 + 1 = \begin{array}{c} \text{---} \\ \text{---} \\ \text{---} \end{array}$$



*Just for Fun*

### About Me



I have  $\begin{array}{c} \text{---} \\ \text{---} \\ \text{---} \end{array}$  eyes.

I have  $\begin{array}{c} \text{---} \\ \text{---} \\ \text{---} \end{array}$  ears.

I have  $\begin{array}{c} \text{---} \\ \text{---} \\ \text{---} \end{array}$  arms.

I have  $\begin{array}{c} \text{---} \\ \text{---} \\ \text{---} \end{array}$  hands.

I have  $\begin{array}{c} \text{---} \\ \text{---} \\ \text{---} \end{array}$  legs.

I have  $\begin{array}{c} \text{---} \\ \text{---} \\ \text{---} \end{array}$  feet.