

Lesson 3 pp. 10-13

Lessons 2, 3

Write the ratios as percents.

25. a. 58 out of 100 58% b. 18:100 18% c. $\frac{7}{100}$ 7%

Answer the question.

26. If 72% of the fish in a pond are bluegills, what percent are not bluegills? 28%



Changing Percents to Fractions

The Studyrite Publishing Company sold 70% of the books it displayed at the homeschool convention. What fraction was this?

To change a percent to a decimal, write it as a two-place decimal. To change it to a fraction, write it with a denominator of 100, and reduce to simplest form.

$$70\% = 0.70 = \frac{70}{100} \quad \frac{70}{100} \text{ reduces to } \frac{7}{10}$$

The Studyrite company sold $\frac{7}{10}$ of the books displayed.

Here is another example.

$$3\% = 0.03 = \frac{3}{100} \quad \frac{3}{100} \text{ cannot be simplified.}$$

Write each percent as a two-place decimal.

1. a. 52% 0.52 b. 80% 0.80 c. 60% 0.60

Write each decimal as a fraction with a denominator of 100.

2. a. 0.35 $\frac{35}{100}$ b. 0.50 $\frac{50}{100}$ c. 0.03 $\frac{3}{100}$

10

Teaching the Lesson

Changing Percents to Fractions

To change a percent to a decimal, remove the percent sign and move the “invisible” decimal point two places to the left to make a two-place decimal. To change a percent to a fraction, write it as a fraction with a denominator of 100. Reduce it to simplest form if necessary.

Board Work for this lesson is found on page 229.

☆ **Optional Activity on page 11.**

Lesson 3

Write each percent as a fraction with a denominator of 100.

3. a. 40% $\frac{40}{100}$ b. 29% $\frac{29}{100}$ c. 6% $\frac{6}{100}$

Change each percent to a fraction showing hundredths. Then reduce to simplest form.

4. a. 60% = $\frac{60}{100}$ = $\frac{3}{5}$ b. 2% = $\frac{2}{100}$ = $\frac{1}{50}$

 *We Remember*

Write the ratios as percents.

5. a. 64 out of 100 64% b. 11:100 11% c. $\frac{25}{100}$ 25%

Answer the question.

6. If 99% of the students like milk, what percent do not like milk? 1%
 $100 - 99 = 1$

Divide. Write remainders with R.

7. a. $600 \overline{)3,842}$ $\begin{array}{r} 6 \text{ R}242 \\ 3600 \\ \hline 242 \end{array}$ b. $400 \overline{)3,542}$ $\begin{array}{r} 8 \text{ R}342 \\ 3200 \\ \hline 342 \end{array}$ c. $300 \overline{)1,928}$ $\begin{array}{r} 6 \text{ R}128 \\ 1800 \\ \hline 128 \end{array}$

Find the sum without adding each number. Look for patterns. No calculators!

- ☆ 8. $11 + 12 + 13 + 11 + 12 + 13 + 11 + 12 + 13 + 11 + 12 + 13 + 11 + 12 + 13 + 11 + 12 + 13 + 11 + 12 + 13 =$ 216

☆ **Optional Activity.**

? . . . Mental Math

9. $\frac{1}{3}$ of 90 -15 $+3$ $\times 9$ $+10$ $+11$ = 5

Board Work

→ Change to decimals:

36%	75%	81%	99%	57%	44%	12%	4%	6%	2%
0.36	0.75	0.81	0.99	0.57	0.44	0.12	0.04	0.06	0.02

→ Change to fractions in simplest form:

0.25	0.42	0.55	0.6	0.83	0.28	0.93
$\frac{1}{4}$	$\frac{21}{50}$	$\frac{11}{20}$	$\frac{3}{5}$	$\frac{83}{100}$	$\frac{7}{25}$	$\frac{93}{100}$

Lesson 3

— $\frac{+}{\div}$ \times *Skill Builders* —

$\frac{1}{2} = \frac{7}{14}$ $2\frac{8}{14} = \frac{8}{14}$ <p>10. a. $+ 2\frac{2}{7} = \frac{4}{14}$</p> $4\frac{19}{14} = 5\frac{5}{14}$	$6\frac{3}{4} = \frac{9}{12}$ $8\frac{5}{6} = \frac{10}{12}$ <p>b. $+ 2\frac{1}{3} = \frac{4}{12}$</p> $16\frac{23}{12} = 17\frac{11}{12}$	$\begin{array}{r} 73 \\ 19 \\ 62 \\ 87 \\ 59 \\ \hline c. + 76 \\ 376 \end{array}$
<p>11. a. $\begin{array}{r} 0.14 \\ \times 0.4 \\ \hline 0.056 \end{array}$</p>	$7\frac{2}{9} = \frac{11}{9}$ <p>b. $- 3\frac{2}{3} = \frac{6}{9}$</p> $4\frac{5}{9}$	<p>Round to the nearest hundredth.</p> <p>c. $47 \overline{) 2.750} \approx .06$</p> $\begin{array}{r} 0.058 \\ 47 \overline{) 2.750} \\ \underline{235} \\ 400 \\ \underline{376} \\ 24 \end{array}$

— *Mastery Drill* —

12. a. 1 millennium = 1,000 years b. 1 decade = 10 years
 13. a. 1 century = 100 years b. 1 kilometer = 1,000 meters
 14. a. $3^2 = \underline{9}$ b. $6^2 = \underline{36}$ c. $11^2 = \underline{121}$ d. $14^2 = \underline{196}$
 15. An equilateral triangle has 3 congruent sides.
 16. A scalene triangle has 0 congruent sides.
 17. An isosceles triangle has 2 congruent sides.

Answer the question.

18. What is the volume of a drawer 10 inches long, 8 inches wide, and 3 inches deep?

240 inches ³	$\begin{array}{r} 10 \\ \times 8 \\ \hline 80 \end{array}$	$\begin{array}{r} 80 \\ \times 3 \\ \hline 240 \end{array}$
-------------------------	--	---

Teacher Notes:

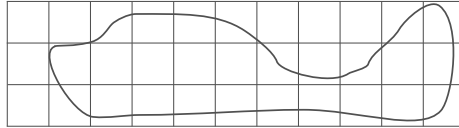
Lesson 3

19. Six mobile homes on half-acre lots are for rent at the following costs per month: \$650, \$625, \$590, \$615, \$625, and \$642. What is the average cost of renting these mobile homes? Round to the nearest dollar. \$625.00

$$(650 + 625 + 590 + 615 + 625 + 642) \div 6 = 624.50$$

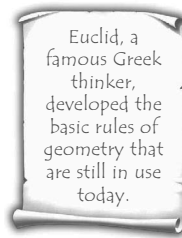
20. Randy's new home is near Big Whaley Lake, shown below. Estimate the area of the lake, if each square in the picture measures 1 mi^2 . Hint: Put parts of the squares together in your mind to count the squares that are not whole.

15 OR 16 mi^2



Match the words and expressions.

- | | |
|---------------------------------------|--------------------|
| 21. <u>c</u> six minus two times four | a. $6(2)$ |
| 22. <u>a</u> six times two | b. $6n$ |
| 23. <u>b</u> six times a number | c. $6 - 2 \cdot 4$ |
| 24. <u>d</u> six times four | d. 6×4 |



Write the formulas without using multiplication symbols.


25. Area of a square $A = s^2$
 26. Circumference of a circle $C = \pi d$
 27. Area of a triangle $A = \frac{1}{2} bh$
 28. Area of a rectangle $A = lw$

Change each percent to a fraction showing hundredths. Then reduce to simplest form.

- | | |
|--|---|
| 29. a. $76\% = \frac{76}{100} = \frac{19}{25}$ | b. $90\% = \frac{90}{100} = \frac{9}{10}$ |
| 30. a. $34\% = \frac{34}{100} = \frac{17}{50}$ | b. $8\% = \frac{8}{100} = \frac{2}{25}$ |

Teacher Notes:

Lesson 4 pp. 14-19

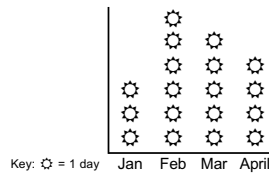


Graphs and Statistics

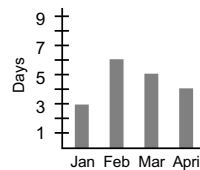
Choosing Suitable Graphs

Graphs are one of the ways to show collected information (called **statistics**) in an organized form.

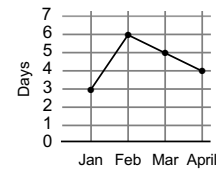
You have learned to recognize, use, and create three different kinds of graphs: pictographs, bar graphs, and line graphs.



pictograph



bar graph



line graph

These three graphs show the same basic information. Usually, however, there is a reason to choose a particular kind of graph for a particular kind of information.

Pictographs work best to display information that can be easily shown with a picture or symbol. It is hard to show exact values with pictures, especially if the numbers are large. But a pictograph can show small numbers of items, or rounded numbers. This pictograph shows information gathered about a small number of students (21 students.)

Class Survey: Favorite Breakfast Foods	
Cereal	☺ ☺ ☺
Toast	☺
Eggs	☺ ☺
Pancakes	☺ ☺ ☺ ☺
☺ represents 2 students	

Teaching the Lesson

Graphs and Statistics: Choosing Suitable Graphs

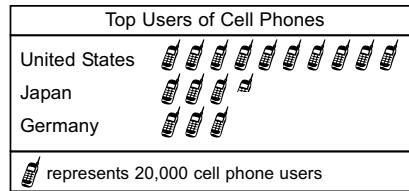
This lesson explains the reasons for choosing particular kinds of graphs for particular kinds of data. Students will be tested on this knowledge. You may use the oral quiz under “Helpful Hints” below to help them retain the facts. However, encourage them to also use logical thinking when doing the review exercises for this graph increment. There may be more than one correct answer for some situations. Give credit to students for using good thinking skills if they can supply logical reasons for answers that differ from the answer key.

△ Teacher Aide Checks on page 19.

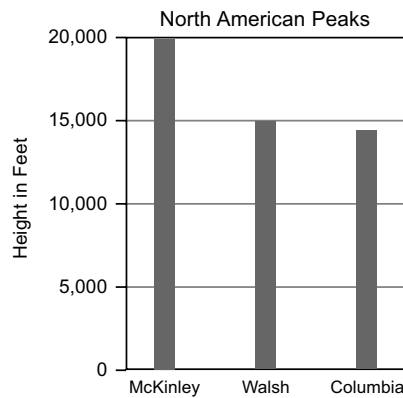
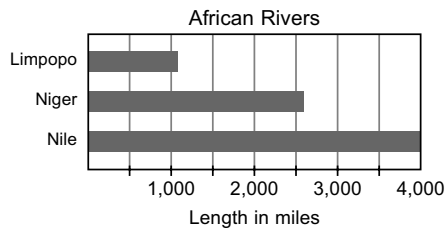
☆ Optional Activity on page 19.

Lesson 4

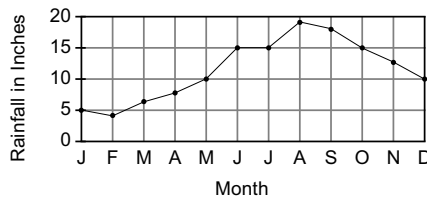
This pictograph uses large numbers that are rounded.



Bar graphs show comparisons. They can be vertical or horizontal. They are usually more exact than pictographs. The following bar graphs compare the lengths of rivers (rivers run horizontally, so the bars are horizontal) and the heights of mountains (mountains are vertical, so the bars are vertical).



Line graphs are most often used to show a relationship between the numbers. They involve information (**data**) that changes. For instance, a line graph might show the rainfall changes from month to month in a tropical country with a rainy season and a dry season.



Oral Drill

→ Quiz the students orally by having them answer *pictograph*, *bar graph*, or *line graph* for the following: (Some answers may vary.)

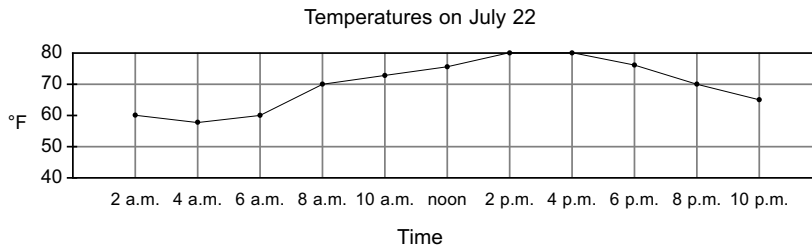
1. Compares small numbers
pictograph
2. Can be vertical or horizontal
bar graph
3. Can show information that is quite exact
bar graph
4. Shows a relationship between numbers
line graph
5. Compares large, rounded numbers
pictograph
6. Shows changes in data over time
line graph
7. Is used to show comparisons
bar graphs
8. Could be used to show favorite books
pictograph
9. Could be used to show grades for a year
line graph

→ Have students tell whether a vertical bar graph or a horizontal bar graph would be best for each set of data:


1. Comparison of 5 tall buildings
vertical bar graph
2. Comparison of the lengths of 3 major roads
horizontal bar graph

Lesson 4

Or a line graph might show how the temperature changes each hour of a summer day, from cool at 2 a.m. to warmer after sunrise, to hot at noon, to cool again after sunset.



Match the kind of data with the best kind of graph to display it.



- | | |
|---|---------------|
| 1. <u>b</u> comparisons of heights, distances, and measurements | a. pictograph |
| 2. <u>a</u> data for a small number of items or for large rounded numbers | b. bar graph |
| 3. <u>c</u> a relationship between numbers | c. line graph |

We Remember _____

Change each percent to a fraction showing hundredths. Then reduce to simplest form.

- | | |
|---|--|
| 4. a. $5\% = \frac{5}{100} = \frac{1}{20}$ | b. $65\% = \frac{65}{100} = \frac{13}{20}$ |
| 5. a. $84\% = \frac{84}{100} = \frac{21}{25}$ | b. $75\% = \frac{75}{100} = \frac{3}{4}$ |

Divide mentally.

- | | | |
|-------------------------------------|---------------------------------|---------------------------|
| 6. a. $600 \overline{)18,000}^{30}$ | b. $8,000 \overline{)64,000}^8$ | c. $60 \overline{)360}^6$ |
|-------------------------------------|---------------------------------|---------------------------|

Teacher Notes:

Lesson 4

— $\frac{+}{-} \times$ Skill Builders —

7. a. $\frac{1}{8} \times \frac{1}{2} \times \frac{1}{2} = \frac{1}{8}$

b. $5\frac{1}{3} \times 4\frac{1}{2} \times 2\frac{2}{3} = 64$

$\frac{8}{1} \times \frac{16}{2} \times \frac{8}{1} = 64$

c. $\begin{array}{r} 28.3 \\ \times 29.8 \\ \hline 2264 \\ 25470 \\ \hline 56600 \\ 843.34 \end{array}$

Divide. Round each quotient to the nearest . . .

8. a. $\begin{array}{r} 2.60 \approx 2.6 \\ 37 \overline{)96.48} \\ \underline{74} \\ 224 \\ \underline{222} \\ 28 \\ \underline{0} \\ 28 \end{array}$...tenth.

b. $\begin{array}{r} 2.084 \approx 2.08 \\ 43 \overline{)89.630} \\ \underline{86} \\ 363 \\ \underline{344} \\ 190 \\ \underline{172} \\ 18 \end{array}$...hundredth.

c. $\begin{array}{r} 1.7246 \approx 1.725 \\ 28 \overline{)48.2900} \\ \underline{28} \\ 202 \\ \underline{196} \\ 69 \\ \underline{56} \\ 130 \\ \underline{112} \\ 180 \\ \underline{168} \\ 12 \end{array}$...thousandth.

Use the commutative properties to finish the equations.

9. a. $o + n = n + o$ b. $a \cdot 45 = 45 \cdot a$ c. $7 \times 9 = 9 \times 7$

Use the associative properties to finish the equations.

10. a. $(p + q) + r = p + (q + r)$ b. $(7 \times 1) \times 5 = 7 \times (1 \times 5)$

Write the ratios as percents.

11. a. 75 out of 100 75% b. 6:100 6% c. $\frac{40}{100}$ 40%

Answer the question.

12. If 35% of the people are believers, what percent are unbelievers? 65%

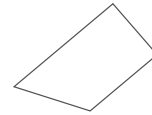
$100 - 35 = 65$

Teacher Notes:

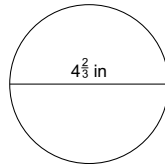
Lesson 4

Complete the sentence.

13. The figure is a trapezoid because
It has only one pair of parallel sides.



Use the formula to find the circumference. Use $\frac{22}{7}$ for pi.



$$C = \pi d$$

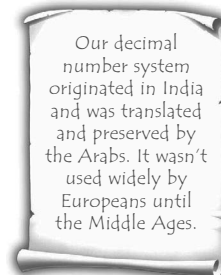
$$C = \frac{22}{7} \times 4\frac{2}{3}$$

$$C = \frac{22}{17} \times \frac{24}{3}$$

$$C = \frac{44}{3}$$

$$C = 14\frac{2}{3}$$

14. 14 $\frac{2}{3}$ in



Match the words and expressions.

- | | |
|--|------------------------|
| 15. <u>b</u> eight divided by two, times seven | a. $4n$ |
| 16. <u>a</u> four times a number | b. $8 \div 2 \times 7$ |
| 17. <u>d</u> three times two | c. $7 \cdot 3$ |
| 18. <u>c</u> seven times three | d. 3×2 |

Write the formulas without using multiplication symbols.

19. Area of a rectangle $A = lw$
 20. Area of a triangle $A = \frac{1}{2}bh$
 21. Circumference of a circle $C = \pi d$
 22. Area of a square $A = s^2$

Rewrite each decimal as a fraction or mixed number with a denominator of 10, 100, or 1,000. Reduce to simplest form.

23. a. $4.15 = \frac{415}{100} = \frac{83}{20}$ b. $7.5 = \frac{75}{10} = \frac{15}{2}$ c. $0.05 = \frac{5}{100} = \frac{1}{20}$

Teacher Notes:

Lesson 4

Mastery Drill

24. a. The fraction we use for π is $\frac{22}{7}$. b. A straight angle measures 180°.
25. An obtuse angle measures between 90° and 180°.
26. An acute angle measures between 0° and 90°.
27. A scalene triangle has 0 congruent sides.
28. An equilateral triangle has 3 congruent sides.
29. An isosceles triangle has 2 congruent sides.
30. 1 millennium = 1,000 years
31. 1 century = 100 years
32. 1 decade = 10 years

Complete the pattern.

- ☆ 33. 119, 102, 85, 68, 51, 34, 17, 0 Subtract 17 from each number to complete the pattern. Work backwards if that's easier.


Round to the nearest dollar.

34. a. \$32.56 \$33.00 b. \$6.50 \$7.00 c. \$23.65 \$24.00

Substitute 7 for a and 1 for b. Simplify the expressions.

- | | | | |
|-------------------------|----------------------|-----------------|-----------------|
| 35. a. $9 - b \times a$ | b. $(b + 13) \div a$ | c. $a \times 4$ | d. $a \times b$ |
| $9 - 1 \times 7$ | $(1 + 13) \div 7$ | 7×4 | 7×1 |
| $9 - 7$ | $14 \div 7$ | 28 | 7 |
| 2 | 2 | | |

If you were constructing a pictograph, what symbol might you use to show the following?



- △ 36. Prices of various kinds of fruits Answers will vary. Example: coins or dollar bills
- △ 37. Number of people in several cities Answers will vary. Example: stick figures of people
- △ 38. Number of trees logged in various states Answers will vary. Example: trees

☆ **Optional Activity.**

△ **Teacher Aide**

Checks: (Nos. 36-38) Make sure students' answers make sense. The Answer Key gives suggested answers.

Teacher Notes:

Lesson 5 p. 20

Lesson Preparation

- Quiz 1 for each student

Quiz 1 pp. 63, 64

Teacher Check.

When student is ready for the quiz, initial circle and administer quiz.

→ Assign Quiz 1.

→ Fascinating Discoveries: Toothpick Puzzles




Quiz 1

- Tell your teacher when you are ready to take Quiz 1.

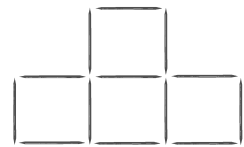


Toothpick Puzzles

Arrange 17 toothpicks like this.



Other possible arrangements.



1. Remove 4 toothpicks to leave only 4 squares.
2. Set up the toothpicks again like before. Now remove 4 toothpicks to leave only 3 squares.



20

Teaching the Lesson

Toothpick Puzzles

This optional activity encourages logical thinking.

- Teacher Check on page 20.