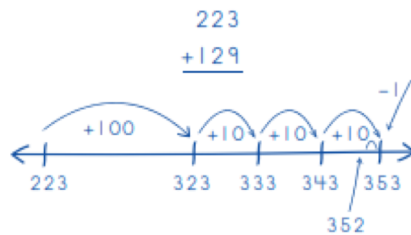

Toy Store Picture Problems

Here are a few strategies you can use to help you solve this week story problems.

Add on the Number Line

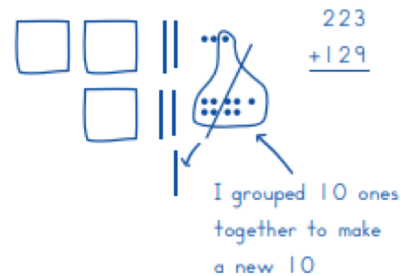


$$100 + 10 + 10 + 10 = 130$$

$$130 - 1 = 129$$

$$223 + 129 = 352 \text{ yo-yos}$$

Make a Labeled Sketch



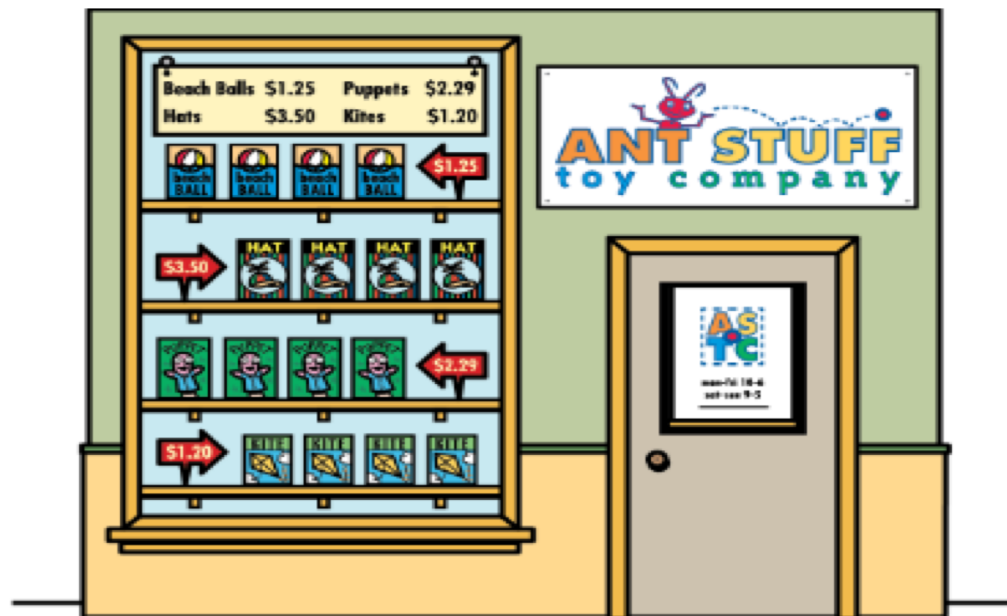
3 hundreds, 5 tens, 2 ones

352 yo-yos

Add From the Front End

$$\begin{array}{r} 223 \\ + 129 \\ \hline \end{array}$$
$$\begin{array}{r} 200 + 100 = 300 \\ 20 + 20 = 40 \\ 3 + 9 = 12 \end{array}$$
$$\begin{array}{r} 300 \\ 40 \\ + 12 \\ \hline 352 \text{ yo-yos} \end{array}$$


Monday's Problem:



Auntie Hill bought her grandchildren some presents to celebrate the beginning of summer. She bought 2 beach balls and a kite.

How much did she have to pay?

Tuesday's Problem:




Antony decided to spend his birthday money on toys for himself and his little brothers. He spent exactly \$23.00.

What did he buy?


Is there more than one answer?

Wednesday's Problem:



Annie Ant saved her allowance until she had \$8.75. She took her money to Ant Stuff and bought toys for herself and her sister. She bought a puppet, a hat, and a kite. How much money did she get back in change?

Thursday's Problem:



Ant Stuff Toy Company was having a sale on dolls and teddy bears, so Mr. Black Ant decided to buy some for his kindergarten class. He spent \$33.00 and got 6 items. What did he buy?

Fun Friday:

Play add and subtract bingo. Here is a link on how to play.

https://www.mathlearningcenter.org/sites/default/files/pdfs/home-learning/family-games/FamGame_Add&SubtractBingo.pdf